

$\mathbb{N} = \{1, 2, \dots\}$.

$\mathbb{Z} = \{\dots, -2, -1, 0, 1, 2, \dots\}$.

\mathbb{Q} = the set of rational numbers.

\mathbb{R} = the set of real numbers.

\mathbb{R}^n = the n -dimensional real space with the Euclidean topology.

\mathbb{C} = the set of complex numbers.

\mathbb{C}^n = the n -dimensional complex space with the Euclidean topology.

$M_n(\mathbb{R}), M_n(\mathbb{C})$ = the vector space of $n \times n$ real or complex matrices, respectively.

f', f'' = the first and second derivatives of the function f , respectively.

$f^{(n)}$ = the n th. derivative of the function f .

\int_C stands for the line integral over the curve C .

I_n = the $n \times n$ identity matrix.

A^{-1} = the inverse of an invertible matrix A .

S_n = the permutation group on n symbols.

$\hat{i} = (1, 0, 0), \hat{j} = (0, 1, 0)$ and $\hat{k} = (0, 0, 1)$.

$\ln x$ = the natural logarithm of x (to the base e).

$|X|$ = the number of elements in a finite set X .

\mathbb{Z}_n = the additive group of integers modulo n .

$\arctan(x)$ denotes the unique $\theta \in (-\pi/2, \pi/2)$ such that $\tan \theta = x$.

All vector spaces are over the real or complex field, unless otherwise stated.

SECTION – A
MULTIPLE CHOICE QUESTIONS (MCQ)

Q. 1 – Q. 10 carry one mark each.

Q. 1 Let $0 < \alpha < 1$ be a real number. The number of differentiable functions $y : [0, 1] \rightarrow [0, \infty)$, having continuous derivative on $[0, 1]$ and satisfying

$$\begin{aligned} y'(t) &= (y(t))^\alpha, \quad t \in [0, 1], \\ y(0) &= 0, \end{aligned}$$

is

- (A) exactly one. (B) exactly two.
(C) finite but more than two. (D) infinite.

Q. 2 Let $P : \mathbb{R} \rightarrow \mathbb{R}$ be a continuous function such that $P(x) > 0$ for all $x \in \mathbb{R}$. Let y be a twice differentiable function on \mathbb{R} satisfying $y''(x) + P(x)y'(x) - y(x) = 0$ for all $x \in \mathbb{R}$. Suppose that there exist two real numbers a, b ($a < b$) such that $y(a) = y(b) = 0$. Then

- (A) $y(x) = 0$ for all $x \in [a, b]$. (B) $y(x) > 0$ for all $x \in (a, b)$.
(C) $y(x) < 0$ for all $x \in (a, b)$. (D) $y(x)$ changes sign on (a, b) .

Q. 3 Let $f : \mathbb{R} \rightarrow \mathbb{R}$ be a continuous function satisfying $f(x) = f(x + 1)$ for all $x \in \mathbb{R}$. Then

- (A) f is not necessarily bounded above.
(B) there exists a unique $x_0 \in \mathbb{R}$ such that $f(x_0 + \pi) = f(x_0)$.
(C) there is no $x_0 \in \mathbb{R}$ such that $f(x_0 + \pi) = f(x_0)$.
(D) there exist infinitely many $x_0 \in \mathbb{R}$ such that $f(x_0 + \pi) = f(x_0)$.



Q. 4 Let $f : \mathbb{R} \rightarrow \mathbb{R}$ be a continuous function such that for all $x \in \mathbb{R}$,

$$\int_0^1 f(xt) dt = 0. \tag{*}$$

Then

- (A) f must be identically 0 on the whole of \mathbb{R} .
- (B) there is an f satisfying (*) that is identically 0 on $(0, 1)$ but not identically 0 on the whole of \mathbb{R} .
- (C) there is an f satisfying (*) that takes both positive and negative values.
- (D) there is an f satisfying (*) that is 0 at infinitely many points, but is not identically zero.

Q. 5 Let p and t be positive real numbers. Let D_t be the closed disc of radius t centered at $(0, 0)$, i.e., $D_t = \{(x, y) \in \mathbb{R}^2 : x^2 + y^2 \leq t^2\}$. Define

$$I(p, t) = \iint_{D_t} \frac{dxdy}{(p^2 + x^2 + y^2)^p}.$$

Then $\lim_{t \rightarrow \infty} I(p, t)$ is finite

- (A) only if $p > 1$.
- (B) only if $p = 1$.
- (C) only if $p < 1$.
- (D) for no value of p .

Q. 6 How many elements of the group \mathbb{Z}_{50} have order 10?

- (A) 10
- (B) 4
- (C) 5
- (D) 8



Q. 7 For every $n \in \mathbb{N}$, let $f_n : \mathbb{R} \rightarrow \mathbb{R}$ be a function. From the given choices, pick the statement that is the negation of

“For every $x \in \mathbb{R}$ and for every real number $\epsilon > 0$, there exists an integer $N > 0$ such that $\sum_{i=1}^p |f_{N+i}(x)| < \epsilon$ for every integer $p > 0$.”

- (A) For every $x \in \mathbb{R}$ and for every real number $\epsilon > 0$, there does not exist any integer $N > 0$ such that $\sum_{i=1}^p |f_{N+i}(x)| < \epsilon$ for every integer $p > 0$.
- (B) For every $x \in \mathbb{R}$ and for every real number $\epsilon > 0$, there exists an integer $N > 0$ such that $\sum_{i=1}^p |f_{N+i}(x)| \geq \epsilon$ for some integer $p > 0$.
- (C) There exists $x \in \mathbb{R}$ and there exists a real number $\epsilon > 0$ such that for every integer $N > 0$, there exists an integer $p > 0$ for which the inequality $\sum_{i=1}^p |f_{N+i}(x)| \geq \epsilon$ holds.
- (D) There exists $x \in \mathbb{R}$ and there exists a real number $\epsilon > 0$ such that for every integer $N > 0$ and for every integer $p > 0$ the inequality $\sum_{i=1}^p |f_{N+i}(x)| \geq \epsilon$ holds.

Q. 8 Which one of the following subsets of \mathbb{R} has a non-empty interior?


- (A) The set of all irrational numbers in \mathbb{R} .
- (B) The set $\{a \in \mathbb{R} : \sin(a) = 1\}$.
- (C) The set $\{b \in \mathbb{R} : x^2 + bx + 1 = 0 \text{ has distinct roots}\}$.
- (D) The set of all rational numbers in \mathbb{R} .

Q. 9 For an integer $k \geq 0$, let P_k denote the vector space of all real polynomials in one variable of degree less than or equal to k . Define a linear transformation $T : P_2 \rightarrow P_3$ by

$$Tf(x) = f''(x) + xf(x).$$

Which one of the following polynomials is not in the range of T ?

- (A) $x + x^2$ (B) $x^2 + x^3 + 2$ (C) $x + x^3 + 2$ (D) $x + 1$



Q. 10 Let $n > 1$ be an integer. Consider the following two statements for an arbitrary $n \times n$ matrix A with complex entries.

- I. If $A^k = I_n$ for some integer $k \geq 1$, then all the eigenvalues of A are k^{th} roots of unity.
- II. If, for some integer $k \geq 1$, all the eigenvalues of A are k^{th} roots of unity, then $A^k = I_n$.

Then

- (A) both I and II are TRUE.
- (B) I is TRUE but II is FALSE.
- (C) I is FALSE but II is TRUE.
- (D) neither I nor II is TRUE.

JAM 2021

Joint Admissions for Masters 2021
Organizing Institute:
Indian Institute of Science Bangalore



Q. 11 – Q. 30 carry two marks each.

Q. 11 Let $M_n(\mathbb{R})$ be the real vector space of all $n \times n$ matrices with real entries, $n \geq 2$. Let $A \in M_n(\mathbb{R})$. Consider the subspace W of $M_n(\mathbb{R})$ spanned by $\{I_n, A, A^2, \dots\}$. Then the dimension of W over \mathbb{R} is necessarily

- (A) ∞ . (B) n^2 . (C) n . (D) at most n .

Q. 12 Let y be the solution of

$$(1+x)y''(x) + y'(x) - \frac{1}{1+x}y(x) = 0, \quad x \in (-1, \infty),$$

$$y(0) = 1, \quad y'(0) = 0.$$

Then

- (A) y is bounded on $(0, \infty)$. (B) y is bounded on $(-1, 0]$.
 (C) $y(x) \geq 2$ on $(-1, \infty)$. (D) y attains its minimum at $x = 0$.

Q. 13 Consider the surface $S = \{(x, y, xy) \in \mathbb{R}^3 : x^2 + y^2 \leq 1\}$. Let $\vec{F} = y\hat{i} + x\hat{j} + \hat{k}$. If \hat{n} is the continuous unit normal field to the surface S with positive z -component, then

$$\iint_S \vec{F} \cdot \hat{n} \, dS$$

equals


- (A) $\frac{\pi}{4}$. (B) $\frac{\pi}{2}$. (C) π . (D) 2π .

Q. 14 Consider the following statements.

- I. The group $(\mathbb{Q}, +)$ has no proper subgroup of finite index.
 II. The group $(\mathbb{C} \setminus \{0\}, \cdot)$ has no proper subgroup of finite index.

Which one of the following statements is true?

- (A) Both I and II are TRUE. (B) I is TRUE but II is FALSE.
 (C) II is TRUE but I is FALSE. (D) Neither I nor II is TRUE.



Q. 15 Let $f : \mathbb{N} \rightarrow \mathbb{N}$ be a bijective map such that

$$\sum_{n=1}^{\infty} \frac{f(n)}{n^2} < +\infty.$$

The number of such bijective maps is

- (A) exactly one.
- (B) zero.
- (C) finite but more than one.
- (D) infinite.

Q. 16 Define

$$S = \lim_{n \rightarrow \infty} \left(1 - \frac{1}{2^2}\right) \left(1 - \frac{1}{3^2}\right) \cdots \left(1 - \frac{1}{n^2}\right).$$

Then

- (A) $S = 1/2$.
- (B) $S = 1/4$.
- (C) $S = 1$.
- (D) $S = 3/4$.

Q. 17 Let $f : \mathbb{R} \rightarrow \mathbb{R}$ be an infinitely differentiable function such that for all $a, b \in \mathbb{R}$ with $a < b$,

$$\frac{f(b) - f(a)}{b - a} = f'\left(\frac{a + b}{2}\right).$$

Then

- (A) f must be a polynomial of degree less than or equal to 2.
- (B) f must be a polynomial of degree greater than 2.
- (C) f is not a polynomial.
- (D) f must be a linear polynomial.



Q. 18 Consider the function

$$f(x) = \begin{cases} 1 & \text{if } x \in (\mathbb{R} \setminus \mathbb{Q}) \cup \{0\}, \\ 1 - \frac{1}{p} & \text{if } x = \frac{n}{p}, n \in \mathbb{Z} \setminus \{0\}, p \in \mathbb{N} \text{ and } \gcd(n, p) = 1. \end{cases}$$

Then

- (A) all $x \in \mathbb{Q} \setminus \{0\}$ are strict local minima for f .
- (B) f is continuous at all $x \in \mathbb{Q}$.
- (C) f is not continuous at all $x \in \mathbb{R} \setminus \mathbb{Q}$.
- (D) f is not continuous at $x = 0$.

Q. 19 Consider the family of curves $x^2 - y^2 = ky$ with parameter $k \in \mathbb{R}$. The equation of the orthogonal trajectory to this family passing through $(1, 1)$ is given by

- (A) $x^3 + 3xy^2 = 4$.
- (B) $x^2 + 2xy = 3$.
- (C) $y^2 + 2x^2y = 3$.
- (D) $x^3 + 2xy^2 = 3$.

Q. 20 Which one of the following statements is true?

- (A) Exactly half of the elements in any even order subgroup of S_5 must be even permutations.
- (B) Any abelian subgroup of S_5 is trivial.
- (C) There exists a cyclic subgroup of S_5 of order 6.
- (D) There exists a normal subgroup of S_5 of index 7.

Q. 21 Let $f : [0, 1] \rightarrow [0, \infty)$ be a continuous function such that

$$(f(t))^2 < 1 + 2 \int_0^t f(s) ds, \text{ for all } t \in [0, 1].$$

Then

- (A) $f(t) < 1 + t$ for all $t \in [0, 1]$.
- (B) $f(t) > 1 + t$ for all $t \in [0, 1]$.
- (C) $f(t) = 1 + t$ for all $t \in [0, 1]$.
- (D) $f(t) < 1 + \frac{t}{2}$ for all $t \in [0, 1]$.



Q. 22 Let A be an $n \times n$ invertible matrix and C be an $n \times n$ nilpotent matrix. If $X = \begin{pmatrix} X_{11} & X_{12} \\ X_{21} & X_{22} \end{pmatrix}$ is a $2n \times 2n$ matrix (each X_{ij} being $n \times n$) that commutes with the $2n \times 2n$ matrix $B = \begin{pmatrix} A & 0 \\ 0 & C \end{pmatrix}$, then

- (A) X_{11} and X_{22} are necessarily zero matrices.
- (B) X_{12} and X_{21} are necessarily zero matrices.
- (C) X_{11} and X_{21} are necessarily zero matrices.
- (D) X_{12} and X_{22} are necessarily zero matrices.

Q. 23 Let $D \subseteq \mathbb{R}^2$ be defined by $D = \mathbb{R}^2 \setminus \{(x, 0) : x \in \mathbb{R}\}$. Consider the function $f : D \rightarrow \mathbb{R}$ defined by


$$f(x, y) = x \sin \frac{1}{y}.$$

Then

- (A) f is a discontinuous function on D .
- (B) f is a continuous function on D and cannot be extended continuously to any point outside D .
- (C) f is a continuous function on D and can be extended continuously to $D \cup \{(0, 0)\}$.
- (D) f is a continuous function on D and can be extended continuously to the whole of \mathbb{R}^2 .

Q. 24 Which one of the following statements is true?

- (A) $(\mathbb{Z}, +)$ is isomorphic to $(\mathbb{R}, +)$.
- (B) $(\mathbb{Z}, +)$ is isomorphic to $(\mathbb{Q}, +)$.
- (C) $(\mathbb{Q}/\mathbb{Z}, +)$ is isomorphic to $(\mathbb{Q}/2\mathbb{Z}, +)$.
- (D) $(\mathbb{Q}/\mathbb{Z}, +)$ is isomorphic to $(\mathbb{Q}, +)$.



Q. 25 Let y be a twice differentiable function on \mathbb{R} satisfying

$$y''(x) = 2 + e^{-|x|}, \quad x \in \mathbb{R},$$

$$y(0) = -1, \quad y'(0) = 0.$$

Then

- (A) $y = 0$ has exactly one root.
 (B) $y = 0$ has exactly two roots.
 (C) $y = 0$ has more than two roots.
 (D) there exists an $x_0 \in \mathbb{R}$ such that $y(x_0) \geq y(x)$ for all $x \in \mathbb{R}$.

Q. 26 Let $f : [0, 1] \rightarrow [0, 1]$ be a non-constant continuous function such that $f \circ f = f$. Define

$$E_f = \{x \in [0, 1] : f(x) = x\}.$$

Then

- (A) E_f is neither open nor closed. (B) E_f is an interval.
 (C) E_f is empty. (D) E_f need not be an interval.

Q. 27 Let g be an element of S_7 such that g commutes with the element $(2, 6, 4, 3)$. The number of such g is

- (A) 6. (B) 4. (C) 24. (D) 48.

Q. 28 Let G be a finite abelian group of odd order. Consider the following two statements:

I. The map $f : G \rightarrow G$ defined by $f(g) = g^2$ is a group isomorphism.

II. The product $\prod_{g \in G} g = e$.

- (A) Both I and II are TRUE. (B) I is TRUE but II is FALSE.
 (C) II is TRUE but I is FALSE. (D) Neither I nor II is TRUE.



Q. 29 Let $n \geq 2$ be an integer. Let $A : \mathbb{C}^n \rightarrow \mathbb{C}^n$ be the linear transformation defined by

$$A(z_1, z_2, \dots, z_n) = (z_n, z_1, z_2, \dots, z_{n-1}).$$

Which one of the following statements is true for every $n \geq 2$?

- (A) A is nilpotent.
- (B) All eigenvalues of A are of modulus 1.
- (C) Every eigenvalue of A is either 0 or 1.
- (D) A is singular.

Q. 30 Consider the two series

$$\text{I. } \sum_{n=1}^{\infty} \frac{1}{n^{1+(1/n)}} \quad \text{and} \quad \text{II. } \sum_{n=1}^{\infty} \frac{1}{n^{2-n^{1/n}}}$$

Which one of the following holds?

- (A) Both I and II converge.
- (B) Both I and II diverge.
- (C) I converges and II diverges.
- (D) I diverges and II converges.



SECTION – B
MULTIPLE SELECT QUESTIONS (MSQ)

Q. 31 – Q. 40 carry two marks each.

Q. 31 Let $f : \mathbb{R} \rightarrow \mathbb{R}$ be a function with the property that for every $y \in \mathbb{R}$, the value of the expression

$$\sup_{x \in \mathbb{R}} [xy - f(x)]$$

is finite. Define $g(y) = \sup_{x \in \mathbb{R}} [xy - f(x)]$ for $y \in \mathbb{R}$. Then

(A) g is even if f is even.

(B) f must satisfy $\lim_{|x| \rightarrow \infty} \frac{f(x)}{|x|} = +\infty$.

(C) g is odd if f is even.

(D) f must satisfy $\lim_{|x| \rightarrow \infty} \frac{f(x)}{|x|} = -\infty$.

Q. 32 Consider the equation

$$x^{2021} + x^{2020} + \dots + x - 1 = 0.$$

Then

(A) all real roots are positive.

(B) exactly one real root is positive.

(C) exactly one real root is negative.

(D) no real root is positive.

Q. 33 Let $D = \mathbb{R}^2 \setminus \{(0, 0)\}$. Consider the two functions $u, v : D \rightarrow \mathbb{R}$ defined by

$$u(x, y) = x^2 - y^2 \text{ and } v(x, y) = xy.$$


Consider the gradients ∇u and ∇v of the functions u and v , respectively. Then

(A) ∇u and ∇v are parallel at each point (x, y) of D .


(B) ∇u and ∇v are perpendicular at each point (x, y) of D .

(C) ∇u and ∇v do not exist at some points (x, y) of D .

(D) ∇u and ∇v at each point (x, y) of D span \mathbb{R}^2 .



- Q. 34 Consider the two functions $f(x, y) = x + y$ and $g(x, y) = xy - 16$ defined on \mathbb{R}^2 . Then
- (A) the function f has no global extreme value subject to the condition $g = 0$.
 - (B) the function f attains global extreme values at $(4, 4)$ and $(-4, -4)$ subject to the condition $g = 0$.
 - (C) the function g has no global extreme value subject to the condition $f = 0$.
 - (D) the function g has a global extreme value at $(0, 0)$ subject to the condition $f = 0$.
- Q. 35 Let $f : (a, b) \rightarrow \mathbb{R}$ be a differentiable function on (a, b) . Which of the following statements is/are true?
- (A) $f' > 0$ in (a, b) implies that f is increasing in (a, b) .
 - (B) f is increasing in (a, b) implies that $f' > 0$ in (a, b) .
 - (C) If $f'(x_0) > 0$ for some $x_0 \in (a, b)$, then there exists a $\delta > 0$ such that $f(x) > f(x_0)$ for all $x \in (x_0, x_0 + \delta)$.
 - (D) If $f'(x_0) > 0$ for some $x_0 \in (a, b)$, then f is increasing in a neighbourhood of x_0 .
- Q. 36 Let G be a finite group of order 28. Assume that G contains a subgroup of order 7. Which of the following statements is/are true?
- (A) G contains a unique subgroup of order 7.
 - (B) G contains a normal subgroup of order 7.
 - (C) G contains no normal subgroup of order 7.
 - (D) G contains at least two subgroups of order 7.
- Q. 37 Which of the following subsets of \mathbb{R} is/are connected?
- (A) The set $\{x \in \mathbb{R} : x \text{ is irrational}\}$.
 - (B) The set $\{x \in \mathbb{R} : x^3 - 1 \geq 0\}$.
 - (C) The set $\{x \in \mathbb{R} : x^3 + x + 1 \geq 0\}$.
 - (D) The set $\{x \in \mathbb{R} : x^3 - 2x + 1 \geq 0\}$.



SECTION – C
NUMERICAL ANSWER TYPE (NAT)

Q. 41 – Q. 50 carry one mark each.

Q. 41 The number of cycles of length 4 in S_6 is _____.

Q. 42 The value of

$$\lim_{n \rightarrow \infty} (3^n + 5^n + 7^n)^{\frac{1}{n}}$$

is _____.

Q. 43 Let $B = \{(x, y, z) \in \mathbb{R}^3 : x^2 + y^2 + z^2 \leq 1\}$ and define $u(x, y, z) = \sin((1 - x^2 - y^2 - z^2)^2)$ for $(x, y, z) \in B$. Then the value of

$$\iiint_B \left(\frac{\partial^2 u}{\partial x^2} + \frac{\partial^2 u}{\partial y^2} + \frac{\partial^2 u}{\partial z^2} \right) dx dy dz$$

is _____.

Q. 44 Consider the subset $S = \{(x, y) : x^2 + y^2 > 0\}$ of \mathbb{R}^2 . Let

$$P(x, y) = \frac{y}{x^2 + y^2} \text{ and } Q(x, y) = -\frac{x}{x^2 + y^2}$$

for $(x, y) \in S$. If C denotes the unit circle traversed in the counter-clockwise direction, then the value of

$$\frac{1}{\pi} \int_C (P dx + Q dy)$$

is _____.

Q. 45 Consider the set $A = \{a \in \mathbb{R} : x^2 = a(a+1)(a+2) \text{ has a real root}\}$. The number of connected components of A is _____.

Q. 46 Let V be the real vector space of all continuous functions $f : [0, 2] \rightarrow \mathbb{R}$ such that the restriction of f to the interval $[0, 1]$ is a polynomial of degree less than or equal to 2, the restriction of f to the interval $[1, 2]$ is a polynomial of degree less than or equal to 3 and $f(0) = 0$. Then the dimension of V is equal to _____.

Q. 47 The number of group homomorphisms from the group \mathbb{Z}_4 to the group S_3 is _____.

Q. 48 Let $y : \left(\frac{9}{10}, 3\right) \rightarrow \mathbb{R}$ be a differentiable function satisfying

$$(x - 2y) \frac{dy}{dx} + (2x + y) = 0, \quad x \in \left(\frac{9}{10}, 3\right), \quad \text{and } y(1) = 1.$$

Then $y(2)$ equals _____.

Q. 49 Let $\vec{F} = (y + 1)e^y \cos(x)\hat{i} + (y + 2)e^y \sin(x)\hat{j}$ be a vector field in \mathbb{R}^2 and C be a continuously differentiable path with the starting point $(0, 1)$ and the end point $\left(\frac{\pi}{2}, 0\right)$. Then

$$\int_C \vec{F} \cdot d\vec{r}$$

equals _____.

Q. 50 The value of

$$\frac{\pi}{2} \lim_{n \rightarrow \infty} \cos\left(\frac{\pi}{4}\right) \cos\left(\frac{\pi}{8}\right) \cdots \cos\left(\frac{\pi}{2^{n+1}}\right)$$

is _____.



Q. 51 – Q. 60 carry two marks each.

Q. 51 The number of elements of order two in the group S_4 is equal to _____.

Q. 52 The least possible value of k , accurate up to two decimal places, for which the following problem

$$\begin{aligned} y''(t) + 2y'(t) + ky(t) &= 0, t \in \mathbb{R}, \\ y(0) = 0, y(1) = 0, y(1/2) &= 1, \end{aligned}$$

has a solution is _____.

Q. 53 Consider those continuous functions $f : \mathbb{R} \rightarrow \mathbb{R}$ that have the property that given any $x \in \mathbb{R}$,

$$f(x) \in \mathbb{Q} \text{ if and only if } f(x+1) \in \mathbb{R} \setminus \mathbb{Q}.$$

The number of such functions is _____.

Q. 54 The largest positive number a such that

$$\int_0^5 f(x) dx + \int_0^3 f^{-1}(x) dx \geq a$$

for every strictly increasing surjective continuous function $f : [0, \infty) \rightarrow [0, \infty)$ is _____.

Q. 55 Define the sequence

$$s_n = \begin{cases} \frac{1}{2^n} \sum_{j=0}^{n-2} 2^{2j} & \text{if } n > 0 \text{ is even,} \\ \frac{1}{2^n} \sum_{j=0}^{n-1} 2^{2j} & \text{if } n > 0 \text{ is odd.} \end{cases}$$

Define $\sigma_m = \frac{1}{m} \sum_{n=1}^m s_n$. The number of limit points of the sequence $\{\sigma_m\}$ is _____.



Q. 56 The determinant of the matrix

$$\begin{pmatrix} 2021 & 2020 & 2020 & 2020 \\ 2021 & 2021 & 2020 & 2020 \\ 2021 & 2021 & 2021 & 2020 \\ 2021 & 2021 & 2021 & 2021 \end{pmatrix}$$

is _____.

Q. 57 The value of

$$\lim_{n \rightarrow \infty} \int_0^1 e^{x^2} \sin(nx) dx$$

is _____.

Q. 58 Let S be the surface defined by

$$\{(x, y, z) \in \mathbb{R}^3 : z = 1 - x^2 - y^2, z \geq 0\}.$$

Let $\vec{F} = -y\hat{i} + (x - 1)\hat{j} + z^2\hat{k}$ and \hat{n} be the continuous unit normal field to the surface S with positive z -component. Then the value of

$$\frac{1}{\pi} \iint_S (\nabla \times \vec{F}) \cdot \hat{n} dS$$

is _____.

Q. 59 Let $A = \begin{pmatrix} 2 & -1 & 3 \\ 2 & -1 & 3 \\ 3 & 2 & -1 \end{pmatrix}$. Then the largest eigenvalue of A is _____.

Q. 60 Let $A = \begin{pmatrix} 1 & 0 & 0 & 0 \\ 0 & 1 & 0 & 0 \\ 0 & 0 & -1 & 0 \\ 0 & 0 & 0 & -1 \end{pmatrix}$. Consider the linear map T_A from the real vector space $M_4(\mathbb{R})$ to itself defined by $T_A(X) = AX - XA$, for all $X \in M_4(\mathbb{R})$. The dimension of the range of T_A is _____.

END OF THE QUESTION PAPER

Answer Key of JAM-2021 Mathematics (MA) Paper

Note: Question numbers pertain to the question paper published on the JAM 2021 website

Q. No.	Answer
1	D
2	A
3	D
4	A
5	A
6	B
7	C
8	C
9	D
10	B
11	D
12	D
13	B
14	A
15	B
16	A
17	A
18	A
19	A
20	C
21	A
22	B
23	C
24	C
25	B
26	B
27	C
28	A
29	B
30	B

Q. No.	Answer
31	A, B
32	A, B
33	B, D
34	A, D
35	A, C
36	A, B
37	B, C
38	B, C, D
39	A, B, C
40	MTA
41	90
42	7
43	0
44	-2
45	2
46	5
47	4
48	3
49	1
50	1
51	9
52	10.8 to 10.9
53	0
54	15
55	0
56	2021
57	0
58	2
59	4
60	8